

Good morning, Juniper and Elm classes

For maths today, please have a go at some of these puzzles, using your knowledge of times tables.

Then spend 20 minutes on Times Tables Rockstars, to make sure your times tables knowledge is top-notch.

Stay safe, everyone!

Mrs Trim

## Fireworks

Emma had some fireworks.  
Some made 3 stars.  
Some made 4 stars.



Altogether Emma's fireworks made 19 stars.  
How many of them made 3 stars?  
Find two different answers.

What if Emma's fireworks made 25 stars?  
Find two different answers.




## At the toy shop

The toy shop stocks tricycles and go-carts.

The tricycles have 3 wheels.

The go-carts have 5 wheels.



Suna counted the wheels.

He counted 37 altogether.

How many tricycles are there?

How many go-carts?

Find two ways to do it.

## Footsteps in the snow

Little has size 2 boots.



Middle has size 3 boots.

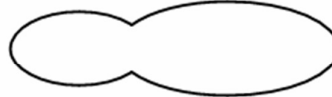


They are one and a half times the length of Little's boots.

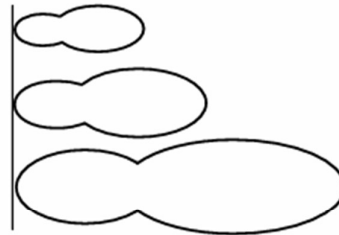
Big has size 5 boots.



A little boot and a middle boot are the same length as a big boot.



They start with the heels of their boots on the same line.




They each walk heel to toe.



When will all three heels be in line again?

## Zids and Zods



Zids have 4 spots.

Zods have 9 spots.

Altogether some Zids and Zods have 48 spots.

How many Zids are there?

How many Zods?

What if Zids have 5 spots, Zods have 7 spots,  
and there are 140 spots altogether?

Find as many solutions as you can.